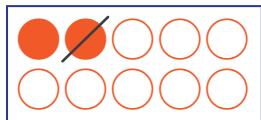
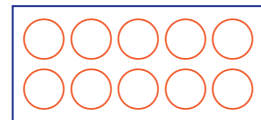


ひきざんを しましょう。

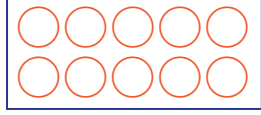
① $2 - 1 = \square$



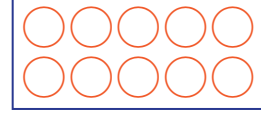
② $3 - 1 = \square$



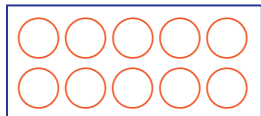
③ $3 - 2 = \square$



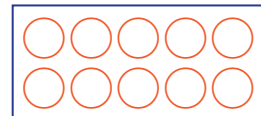
④ $4 - 1 = \square$



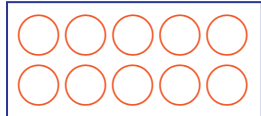
⑤ $5 - 2 = \square$



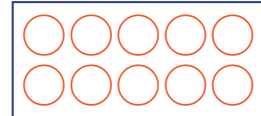
⑥ $7 - 2 = \square$




⑦ $6 - 1 = \square$



⑧ $6 - 3 = \square$



⑨ $5 - 3 = \square$



⑩ $8 - 2 = \square$

