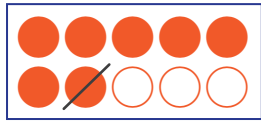
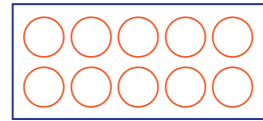


ひきざんを しましょう。


① $7 - 1 = \square$



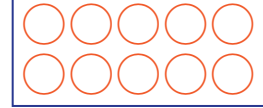
② $9 - 2 = \square$



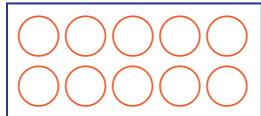
③ $7 - 5 = \square$



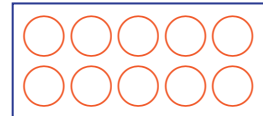
④ $8 - 6 = \square$




⑤ $5 - 4 = \square$




⑥ $6 - 3 = \square$



⑦ $8 - 5 = \square$



⑧ $9 - 5 = \square$



⑨ $7 - 4 = \square$



⑩ $9 - 8 = \square$

