
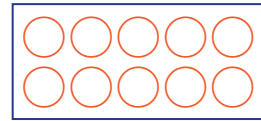


ひきざんを しましょう。

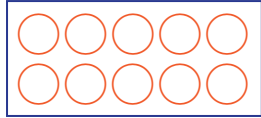
① $8 - 1 = \square$



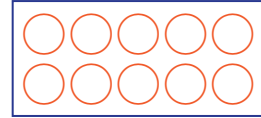
② $4 - 3 = \square$



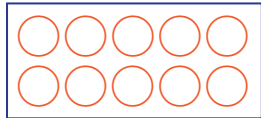
③ $9 - 4 = \square$



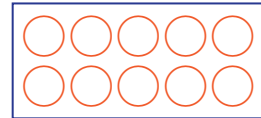
④ $8 - 7 = \square$



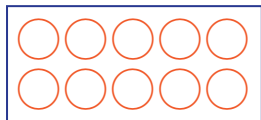
⑤ $7 - 6 = \square$



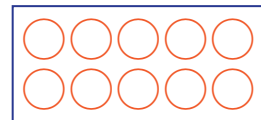
⑥ $8 - 5 = \square$



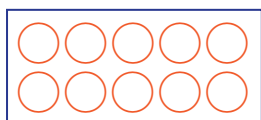
⑦ $9 - 6 = \square$



⑧ $6 - 4 = \square$



⑨ $7 - 3 = \square$



⑩ $9 - 7 = \square$

