



3つの かずの たしざんを しましょう。


① $4 + 2 + 3 = \square$




② $5 + 1 + 3 = \square$




③ $1 + 6 + 2 = \square$




④ $4 + 4 + 2 = \square$




⑤ $6 + 2 + 1 = \square$




⑥ $2 + 6 + 2 = \square$




⑦ $8 + 1 + 1 = \square$




⑧ $3 + 2 + 4 = \square$




⑨ $4 + 3 + 2 = \square$




⑩ $1 + 2 + 6 = \square$




⑪ $2 + 5 + 2 = \square$



⑫ $1 + 1 + 8 = \square$



⑬ $7 + 1 + 1 = \square$



⑭ $2 + 3 + 5 = \square$

