



3つの かずの ひきざんを しましょう。


① $6 - 2 - 1 = \square$




② $5 - 1 - 2 = \square$




③ $4 - 1 - 1 = \square$



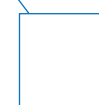
④ $6 - 3 - 1 = \square$




⑤ $7 - 2 - 3 = \square$




⑥ $8 - 3 - 3 = \square$




⑦ $5 - 3 - 1 = \square$




⑧ $9 - 4 - 3 = \square$




⑨ $7 - 3 - 3 = \square$




⑩ $8 - 2 - 3 = \square$




⑪ $6 - 1 - 3 = \square$



⑫ $7 - 1 - 4 = \square$



⑬ $8 - 1 - 5 = \square$



⑭ $9 - 5 - 2 = \square$

