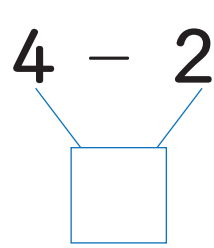
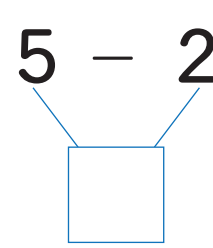


3つのかずのひきざんをしましょう。

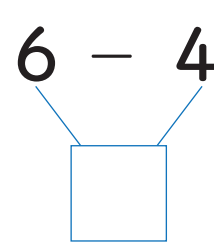
① $4 - 2 - 1 = \square$



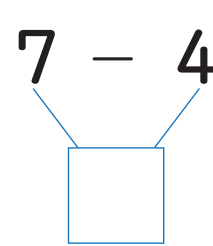
② $5 - 2 - 2 = \square$



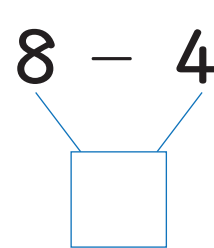
③ $6 - 4 - 1 = \square$



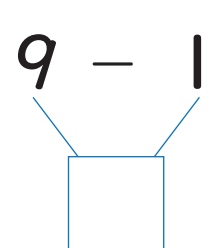
④ $7 - 4 - 2 = \square$



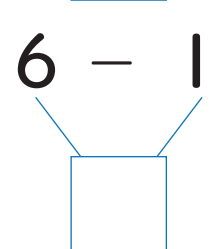
⑤ $8 - 4 - 3 = \square$



⑥ $9 - 1 - 4 = \square$



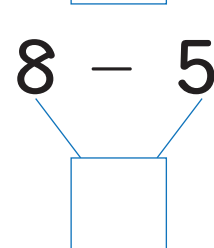
⑦ $6 - 1 - 4 = \square$



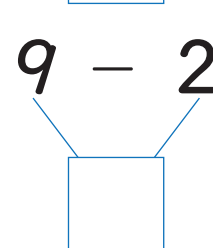
⑧ $7 - 1 - 5 = \square$



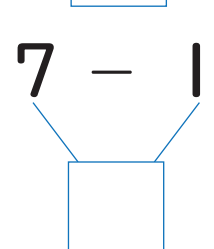
⑨ $8 - 5 - 2 = \square$



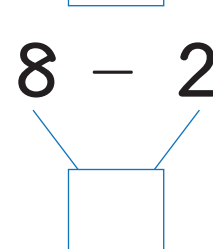
⑩ $9 - 2 - 4 = \square$



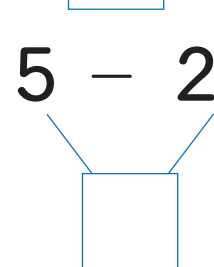
⑪ $7 - 1 - 4 = \square$



⑫ $8 - 2 - 5 = \square$



⑬ $5 - 2 - 1 = \square$



⑭ $9 - 3 - 3 = \square$

