



3つのかずのひきざんをしましょう。


① $7 - 5 - 1 = \square$




② $8 - 6 - 1 = \square$




③ $9 - 3 - 2 = \square$



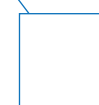
④ $5 - 2 - 2 = \square$




⑤ $6 - 3 - 2 = \square$




⑥ $7 - 2 - 3 = \square$




⑦ $8 - 2 - 4 = \square$




⑧ $9 - 2 - 4 = \square$




⑨ $5 - 1 - 2 = \square$




⑩ $6 - 2 - 3 = \square$




⑪ $7 - 3 - 2 = \square$



⑫ $8 - 3 - 3 = \square$



⑬ $9 - 4 - 3 = \square$



⑭ $6 - 2 - 1 = \square$

