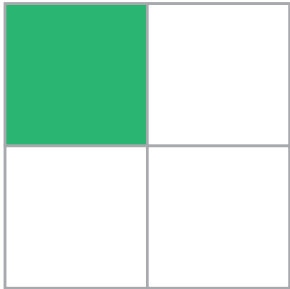


色のついたところは、もとの大きさの何分の何ですか。

(1)



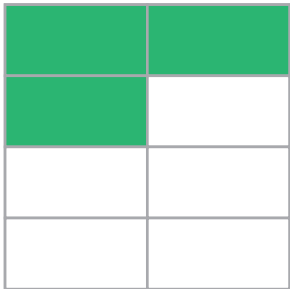
$$\left(\frac{1}{4} \right)$$

(2)




$$\left(\frac{1}{4} \right)$$

(3)



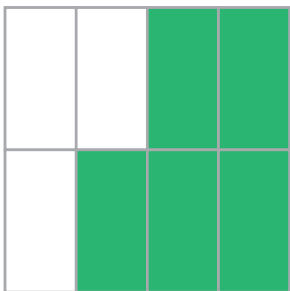
$$\left(\frac{3}{8} \right)$$

(4)



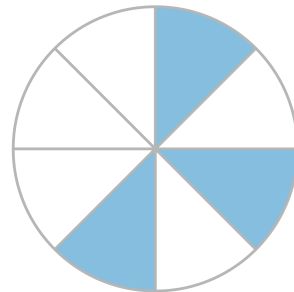
$$\left(\frac{3}{4} \right)$$

(5)



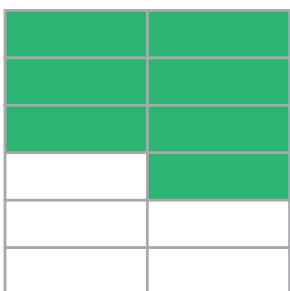
$$\left(\frac{5}{8} \right)$$

(6)



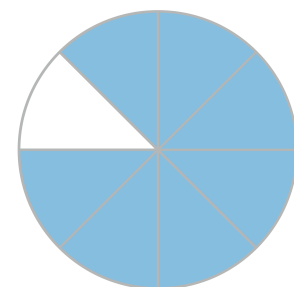
$$\left(\frac{3}{8} \right)$$

(7)



$$\left(\frac{7}{12} \right)$$

(8)



$$\left(\frac{7}{8} \right)$$

