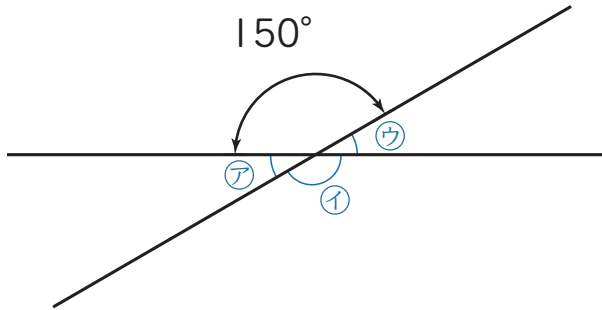


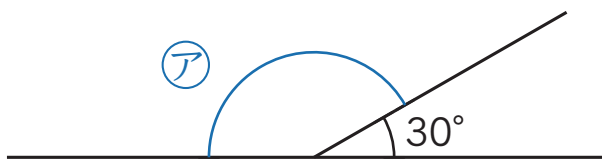
1 次の図の (ア) ~ (ウ) の角度は何度ですか。



(ア) _____
 (イ) _____
 (ウ) _____

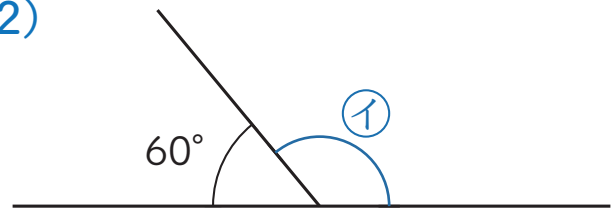
2 次の図の (ア) ~ (エ) の角度は何度ですか。

(1)



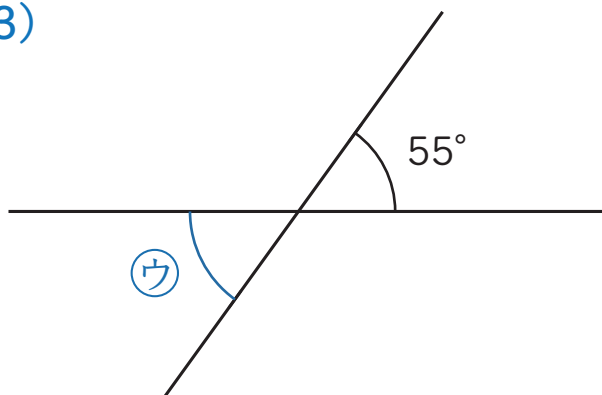
(ア) _____

(2)



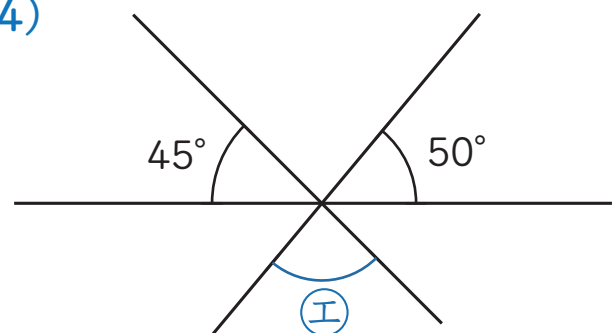
(イ) _____

(3)



(ウ) _____

(4)



(エ) _____

